


# The Last Conquistadors & the French Arrive: *Grade Level*

## Unit 2: Age of Contact

Name:  Date:  Period:


### Hernando de Soto

<p><u>Key Information:</u></p>	<p><u>Significance:</u></p>
<p><u>Essential Question – Your Response:</u></p> <p>I predict that Moscoso <b><i>will / will not</i></b> find gold in Texas because _____</p> <p>_____</p> <p>_____</p>	<p><u>Trace de Soto’s route. Circle the approximate location where he died.</u></p> 


### Luis de Moscoso Alvarado

<p><u>Key Information:</u></p>	<p><u>Significance:</u></p>
<p><u>Essential Question – Your Response:</u></p> <p>This information <b><i>supports / does not support</i></b> what we learned about the region in Unit 1 because _____</p> <p>_____</p>	<p><u>Trace Moscoso’s part of the expedition.</u></p> 

### Juan de Oñate

<p><u>Key Information:</u></p>	<p><u>Significance:</u></p>
<p><u>Essential Question – Your Response:</u></p> <p>Oñate might have encountered _____</p> <p>_____</p> <p>_____</p> <p>in the Mountains and Basins region, based on what we learned in Unit 1.</p>	<p><u>Juan de Oñate’s Expedition</u></p>  <p>The map shows the route of Juan de Oñate's expedition starting in Santa Fe, New Mexico, and traveling south through El Paso to Mexico City, Mexico. Key geographical features labeled include the Pacific Ocean, Gulf of Mexico, and the states of New Mexico and Texas.</p>

**René-Robert Cavalier, Sieur de La Salle**

<p><u>Key Information:</u></p>	<p><u>Significance:</u></p>
<p><u>Essential Question – Your Response:</u></p> <p>I think Spain will focus on <b><u>God / Gold /</u></b></p> <p><b><u>Glory</u></b> in Texas next because _____</p> <p>_____</p> <p>_____</p>	<p><u>Map of Fort Saint Louis</u></p>  <p>The map shows the location of Fort Saint Louis in Texas. It marks the site where La Salle was killed in 1687 and the fort's establishment in 1685. Other labeled locations include Mexico City and the Gulf of Mexico. The Pacific Ocean is also shown to the west.</p>