


The Last Conquistadors & the French Arrive: *Grade Level*


Unit 2: Age of Contact

Name: Date: Period:


Hernando de Soto

<u>Key Information:</u> 	<u>Significance:</u>
<u>Essential Question – Your Response:</u> I predict that Moscoso <u>will / will not</u> find gold in Texas because _____ _____ _____	<u>Trace de Soto's route. Circle the approximate location where he died.</u> 


Luis de Moscoso Alvarado

<u>Key Information:</u> 	<u>Significance:</u>
<u>Essential Question – Your Response:</u> This information <u>supports / does not support</u> what we learned about the region in Unit 1 because _____ _____	<u>Trace Moscoso's part of the expedition.</u> 

Juan de Oñate

<p><u>Key Information:</u></p>	<p><u>Significance:</u></p>
<p><u>Essential Question – Your Response:</u></p> <p>Oñate might have encountered _____</p> <p>_____</p> <p>_____</p> <p>in the Mountains and Basins region, based on what we learned in Unit 1.</p>	<p><u>Juan de Oñate's Expedition</u></p>  <p>The map shows the route of Juan de Oñate's expedition from Mexico City, marked with a blue star, to Santa Fe, New Mexico. The route is indicated by a red line passing through El Paso and Texas. Labels include New Mexico, Santa Fe, El Paso, Texas, Mexico City, Pacific Ocean, and Gulf of Mexico.</p>

René-Robert Cavalier, Sieur de La Salle

<p><u>Key Information:</u></p>	<p><u>Significance:</u></p>
<p><u>Essential Question – Your Response:</u></p> <p>I think Spain will focus on <u>God</u> / <u>Gold</u> / <u>Glory</u> in Texas next because _____</p> <p>_____</p> <p>_____</p>	<p><u>Map of Fort Saint Louis</u></p>  <p>The map shows the location of Fort Saint Louis in Texas, marked with a blue dot. It also indicates the location where La Salle was killed in 1687, marked with a red dot. Labels include Texas, Mexico City, Pacific Ocean, and Gulf of Mexico.</p>